

## Chemical Kinetics      الكيمياء الحركية

المصادر الانكليزية المعتمدة لدراسة المادة:

1-P.W.Atkinus “ physical chemistry” oxford landon 1980, 1990, 1998, 2004, 2014.

2-P.W.Atkinus “ solution manual for physical chemistry” oxford landon 2014.

3-F.Daniel and R.A. Al bertly “physical chemistry”Wily New Yourk (1967, 1990, 2001, 2012)

المصادر العربية:

١ - الكيمياء الحركية لطلبة كلية التربية تاليف الدكتور عمار هاني الدجيلي والدكتور نوري يوسف خليفة ١٩٨٨ .

٢ - الكيمياء الفيزيائية تاليف الدكتور صفاء العمري ونوري يوسف خليفة ١٩٨٩ .

**Chemical kinetics:** the study of *reaction rate*, in addition to the conditions affecting speed and the mechanism of the reaction

We study in chemical reactions:

**Reaction rate: changes in a concentration of a product or a reactant per unit time. Mathematically**

$$\text{Reaction rate} = \frac{\Delta[\ ]}{\Delta t}$$

concentration

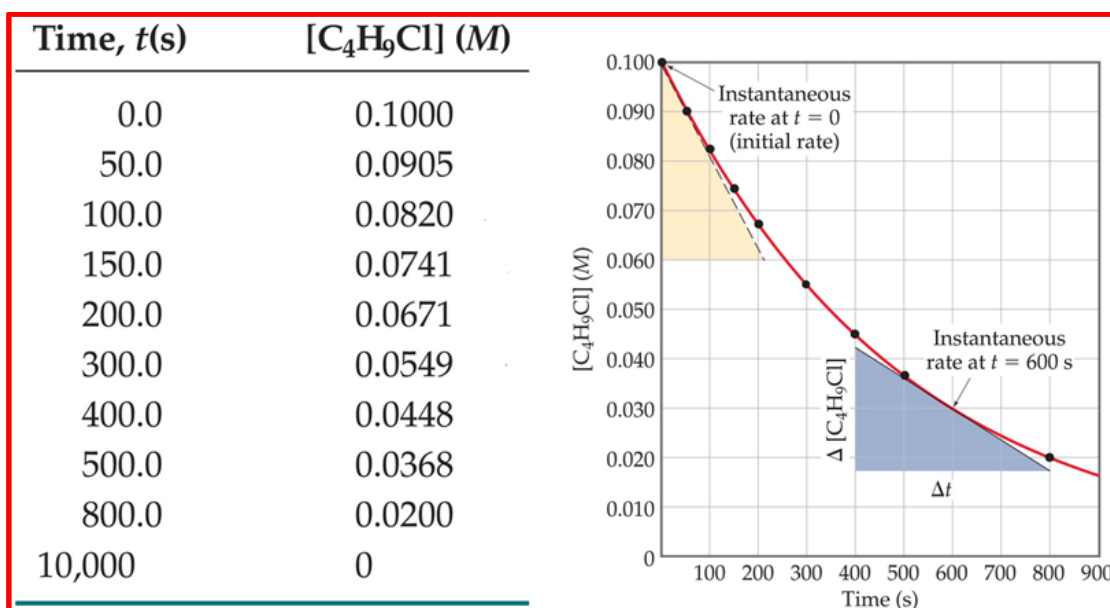
change

We use the experiments data for the forming of Butanol from butane chloride when studies the change of concentration for butane chloride with the time.



The **average rate** of the reaction is the change in concentration divided by the change in time:

$$\text{average rate} = \frac{\Delta [C_4H_9]}{\Delta t} = \frac{0.1000 - 0.0905 \text{ M}}{50.0 - 0.0 \text{ s}}$$



#### Average Rate (M/s)

$1.9 \times 10^{-4}$   
 $1.7 \times 10^{-4}$   
 $1.6 \times 10^{-4}$   
 $1.4 \times 10^{-4}$   
 $1.22 \times 10^{-4}$   
 $1.01 \times 10^{-4}$   
 $0.80 \times 10^{-4}$   
 $0.560 \times 10^{-4}$

-Note that the average rate decreases as the reaction proceeds.

-This is because as the reaction goes forward, there are fewer collisions between reactant molecules.

يمكن ملاحظة ان سرعة استهلاك المتفاعل تساوي سرعة تكون الناتج:

$$\text{Rate} = \frac{-\Delta [C_4H_9Cl]}{\Delta t} = \frac{\Delta [C_4H_9OH]}{\Delta t}$$

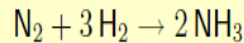
Example: find the ratios between the rate of reactant and product for the reaction:



Answer:

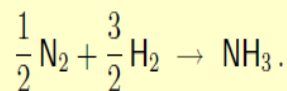
$$rate = -\frac{\Delta [\text{H}_2]}{\Delta t} = \frac{1}{2} \frac{\Delta [\text{HI}]}{\Delta t}$$

The reaction



proceeded in a closed autoclave of the volume  $V = 5 \text{ dm}^3$ . In the course of 1 s, 0.01 moles of nitrogen reacted.

- Estimate the rates of consumption of nitrogen and hydrogen, the rate of formation of ammonia, and the rate of the reaction.
- Find out how these rates will change if we write the reaction in the form



### Solution

a) **The change in the concentration of nitrogen is**

$$\Delta c_{\text{N}_2} = \Delta n_{\text{N}_2}/V = -0.01/5 = -0.002 \text{ mol dm}^{-3}.$$

**The rate of consumption of nitrogen is**

$$r_{\text{N}_2} = -\frac{d c_{\text{N}_2}}{d \tau} \doteq -\frac{\Delta c_{\text{N}_2}}{\Delta \tau} = -\frac{-0.002}{1} = 0.002 \text{ mol dm}^{-3} \text{ s}^{-1}$$

According to

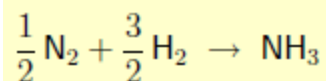
$$r = -\frac{1}{a} \frac{d c_A}{d \tau} = -\frac{1}{b} \frac{d c_B}{d \tau} = \dots = \frac{1}{s} \frac{d c_S}{d \tau} = \frac{1}{t} \frac{d c_T}{d \tau}$$

$$r_{\text{N}_2} = r = 0.002 \text{ mol dm}^{-3} \text{ s}^{-1}$$

$$r_{\text{H}_2} = 3 r = 0.006 \text{ mol dm}^{-3} \text{ s}^{-1}$$

$$r_{\text{NH}_3} = 2 r = 0.004 \text{ mol dm}^{-3} \text{ s}^{-1}$$

b) For the same reaction written in the form



*The rate of reaction will be double, the rates  $r_{\text{N}_2}$ ,  $r_{\text{H}_2}$ ,  $r_{\text{NH}_3}$  will not change*

## Kinetic equation

*A differential equation representing the relation between the concentrations of substances and time.*

$$r_A = -\frac{dc_A}{d\tau} = f(c_A, c_B, \dots, c_S, c_T, \dots)$$

The rate of formation of the product or the rate of reaction appearing on the left side of the equation. By solving kinetic equations we obtain the time dependence of the reactants concentrations. The “simple” reaction refer to for such a chemical reaction whose kinetic equation has the form:

$$r_A = -\frac{dc_A}{d\tau} = k_A c_A^\alpha c_B^\beta \dots$$

where A, B, . . . are the reactants. The exponent  $\alpha$  is called the order of reaction with respect to component A,  $\beta$  is the order of reaction with respect to B, etc.

The sum of the exponents  $n = \alpha + \beta + \dots$  is called the (overall) order of reaction.

The constant  $k_A$  in the kinetic equation is called the **rate constant**. It is the function of temperature. The dimension of the rate constant depends on the reaction order. Main unit:  $s^{-1} (molm^{-3})^{1-n}$ , where n is the order of reaction.

من المتقدم سلفا نجد اننا نبحث في الكيمياء الحركية على العلاقة الرياضية التي تفسر او تضع علاقة بين التركيز للمتفاعل او الناتج مع الزمن بما يعطي تفسيراً كاملاً للتفاعل من الناحية الكمية والنوعية من خلال تحديد الميكانيكية المحتملة لحصول التفاعل.

قبل ان نبدأ بتصنيف التفاعلات الكيميائية حسب مدلولاتها الرياضية او ما يسمى مرتبتها المؤثرة على سير التفاعل نلحق مجموعة من الاسئلة الاثرائية التي تزيد من فهم العلاقات المذكورة سابقاً:

Example" Estimate the **orders** and *rate constant*  $k$  from the results observed for the reaction? What is the rate when  $[H_2O_2] = [I^-] = [H^+] = 1.0 \text{ M}$  if you have the results for many runs of reaction?"

	<b>H<sub>2</sub>O<sub>2</sub> + 3 I<sup>-</sup> + 2 H<sup>+</sup> → I<sub>3</sub><sup>-</sup> + 2 H<sub>2</sub>O</b>				
Run					Rate M S <sup>-1</sup>
1	0.010	0.010	0.0050		1.15e-6
2	0.020	0.010	0.0050		2.30e-6
3	0.010	0.020	0.0050		2.30e-6
4	0.010	0.010	0.0100		1.15e-6

Answer:

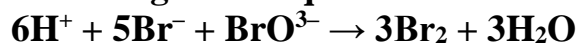
FROM run 1 and 2 we can divided it to find one of them

$$\begin{array}{rclclcl}
 1.15\text{e-}6 & k (0.010)^x(0.010)^y(0.0050)^z & \leftarrow \text{exprmt 1} & 1 \\
 \text{-----} = \text{-----} & & & \\
 2.30\text{e-}6 & k (0.020)^x(0.010)^y(0.0050)^z & \leftarrow \text{exprmt 2} & 2
 \end{array}$$

Then X = 1

**Question:**

**Bromide ions and bromate ions react in acid solution to give bromine according to the equation:**



**Rate measurements on four different reaction mixtures gave the following data.**

Mixture	[H <sup>+</sup> ] (mol l <sup>-1</sup> )	[Br <sup>-</sup> ] (mol l <sup>-1</sup> )	[BrO <sub>3</sub> <sup>-</sup> ] (mol l <sup>-1</sup> )	Relative rate
1	0.45	0.375	0.075	1
2	0.45	0.75	0.075	2
3	0.9	0.375	0.075	4
4	0.45	0.375	0.15	4

- What is the rate expression for the reaction?
- What is the order of the reaction with respect to each of the reactants?
- What is the overall order of the reaction?
- Explain why the rate equation and the overall equation are different.

**1) Chemical kinetics is the branch of chemistry which deals with the study of:**

- a) Speed or rate of chemical reaction.
- b) The factors affecting the rates of the reaction.
- c) The mechanism by which the reactions proceed.
- d) All of these. ((ANSWER : All of these))

**2) The unit of the rate of reaction is:**

- a)  $\text{mol L}^{-1} \text{min}^{-1}$
- b)  $\text{mol}^{-1} \text{L min}^{-1}$
- c) Both a and b
- d) none of these.

((ANSWER :  $\text{mol L}^{-1} \text{min}^{-1}$ ))

**3) The rate of reaction depends upon the molar concentration of reactants which:**

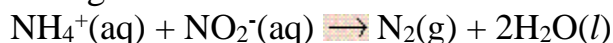
- a) Keep on increasing with passage of time.
- b) Keep on decreasing with passage of time.
- c) Remains same with passage of time.
- d) Does not depend upon the time.

((ANSWER : Keep on decreasing with passage of time.

**4) The factors on which the rate of reaction depends is:**

- a) Temperature.
- b) Presence of catalyst.
- c) Presence of light.
- d) All of these. ((ANSWER : All of these.

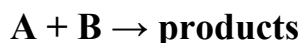
Given the following data for this reaction:



<u>EXPT</u>	<u>[NH<sub>4</sub><sup>+</sup>]</u>	<u>[NO<sub>2</sub><sup>-</sup>]</u>	<u>RATE</u>
1	0.010 M	0.020 M	0.020 M/s
2	0.015 M	0.020 M	0.030 M/s
3	0.010 M	0.010 M	0.005 M/s

Find the rate law for the reaction.

**For simple reaction:**



**The rate of the forward reaction at any time can be related to the concentration of A**

And B at different time which can be expressed as follows:

rate  $\propto [A][B]$

when substituted the Proportion mark  $\propto$  we obtain the equation:

rate  $= k[A][B]$

where  $k$  is the rate constant.

In more general terms, for a simple reaction:

$nA + mB \rightarrow \text{products}$

rate  $= k[A]^n[B]^m$

This equation is **the rate law**. The quantities  $n$  and  $m$  are termed the orders with respect to the reactants A and B respectively. The overall order of reaction is given as the sum of the powers of the concentration terms that occur in the rate equation, i.e. in the above example the overall order is  $n + m$ .

من هذا يمكن ان نصنف التفاعلات حسب المرتبة الى التصنيفات الاتية:

**Rate law**                      **Order of reaction**

rate  $\propto [A]^0$                       0

rate  $\propto [A]^1$                       1

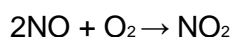
rate  $\propto [A]^2$                       2

rate  $\propto [A]^1[B]^1$                       2

rate  $\propto [A]^1[B]^2$                       3

### Example

Calculate the rate constant for the reaction between nitrogen monoxide and oxygen:



Experiment	Initial concentrations (mol l <sup>-1</sup> )		Initial rate of NO <sub>2</sub> formed (mol l <sup>-1</sup> s <sup>-1</sup> )
	[NO]	[O <sub>2</sub> ]	
1	$2.0 \times 10^{-5}$	$4.0 \times 10^{-5}$	$1.4 \times 10^{-10}$
2	$2.0 \times 10^{-5}$	$8.0 \times 10^{-5}$	$2.8 \times 10^{-10}$
3	$4.0 \times 10^{-5}$	$4.0 \times 10^{-5}$	$5.6 \times 10^{-10}$